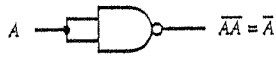


LOGIC GATE EXAMPLES

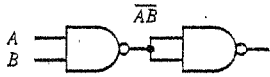
FIND THE TRUTH TABLE FOR EACH OF THE COMBINATIONAL LOGIC CIRCUITS BELOW

EXAMPLE:

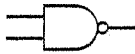


A	Z
0	1
1	0

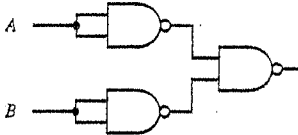
1.



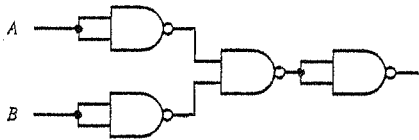
2.



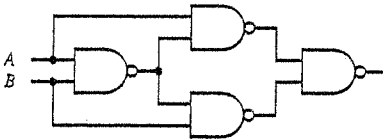
3.



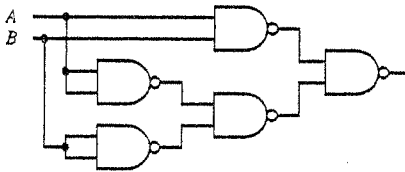
4.



5.



6.



7.

